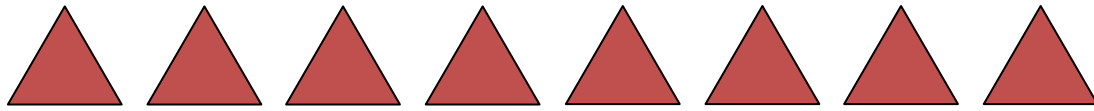


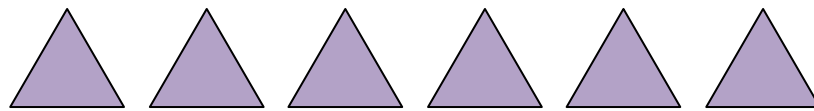
Subtraction using pictures

Grade 1 Subtraction Worksheet

Cross out the shapes according to the number sentences. Then, find the answers.



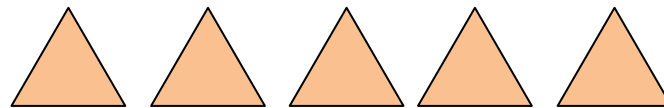
$$8 - 3 = \underline{\quad}$$



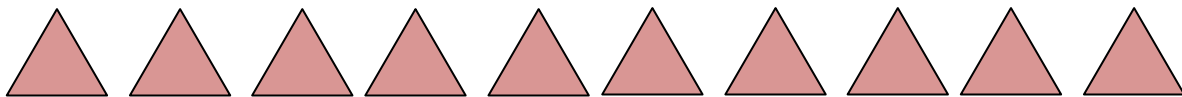
$$6 - 5 = \underline{\quad}$$



$$3 - 1 = \underline{\quad}$$

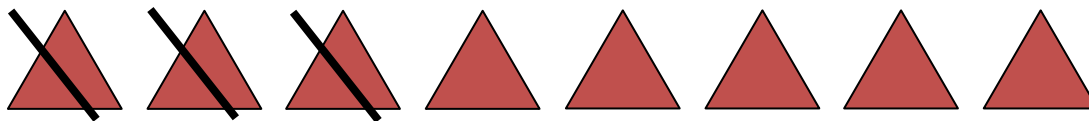


$$5 - 2 = \underline{\quad}$$

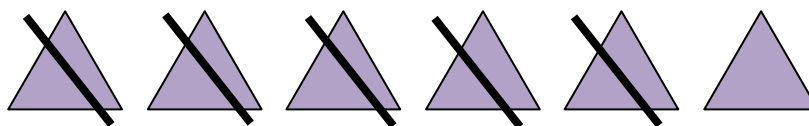


$$10 - 4 = \underline{\quad}$$

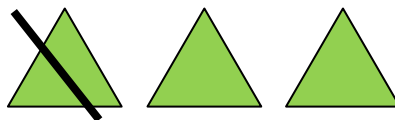
Answers



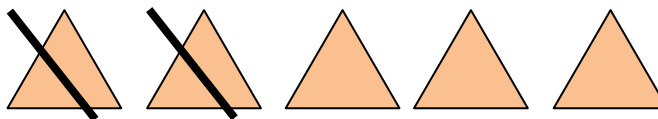
$$8 - 3 = 5$$



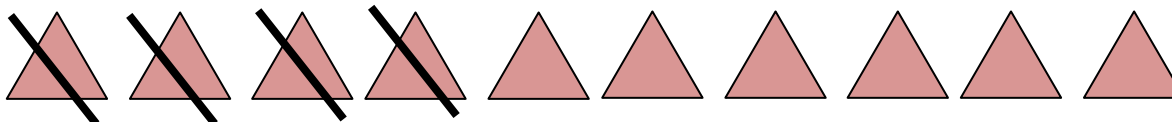
$$6 - 5 = 1$$



$$3 - 1 = 2$$



$$5 - 2 = 3$$



$$10 - 4 = 6$$