


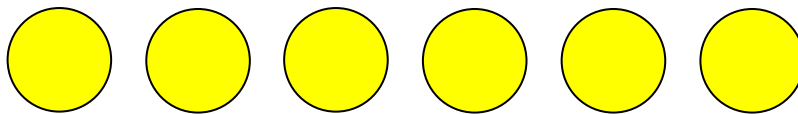
Subtraction using pictures

Grade 1 Subtraction Worksheet

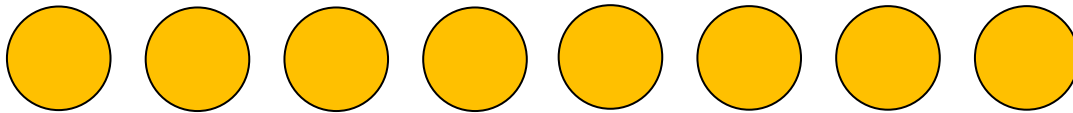
Cross out the shapes according to the number sentences. Then, find the answers.



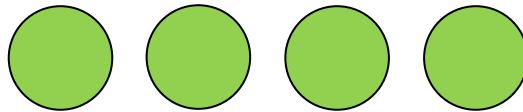
$$7 - 2 = \underline{\quad}$$




$$6 - 3 = \underline{\quad}$$



$$8 - 6 = \underline{\quad}$$




$$4 - 1 = \underline{\quad}$$

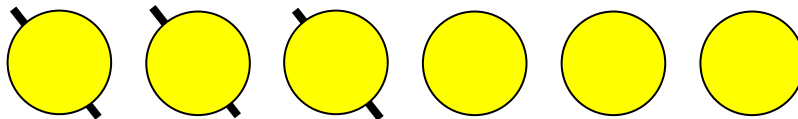


$$9 - 4 = \underline{\quad}$$

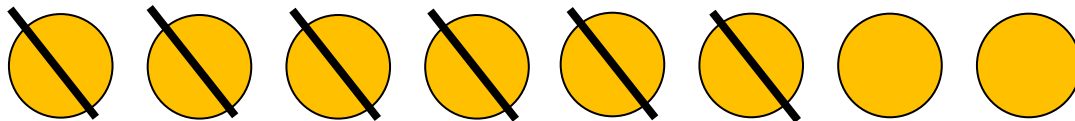
Answers



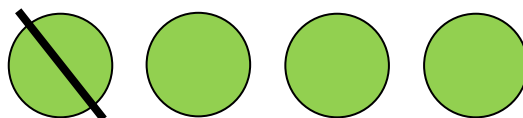
$$7 - 2 = 5$$




$$6 - 3 = 3$$



$$8 - 6 = 2$$



$$4 - 1 = 3$$



$$9 - 4 = 5$$