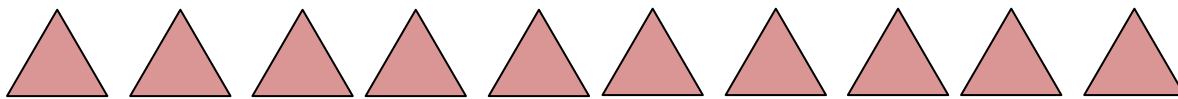


Subtraction using pictures

Grade 1 Subtraction Worksheet

Cross out the shapes according to the number sentences. Then, find the answers.



$$10 - 7 = \underline{\quad}$$



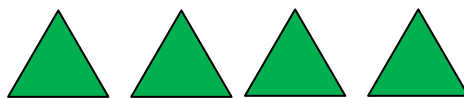
$$5 - 3 = \underline{\quad}$$



$$7 - 2 = \underline{\quad}$$

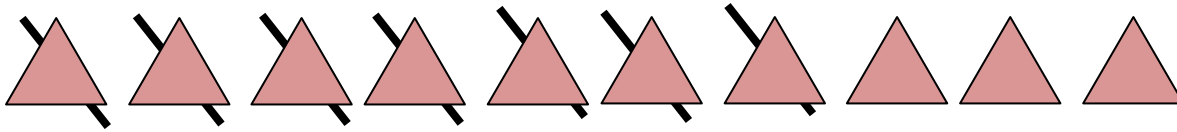


$$9 - 1 = \underline{\quad}$$

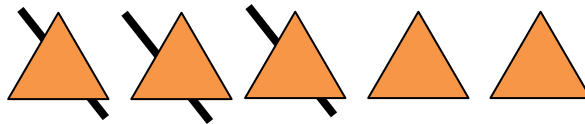


$$4 - 4 = \underline{\quad}$$

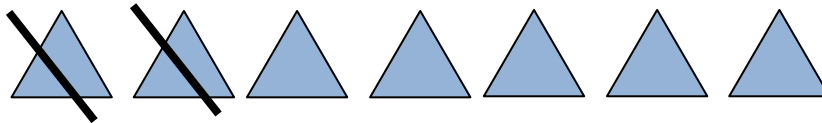
Answers



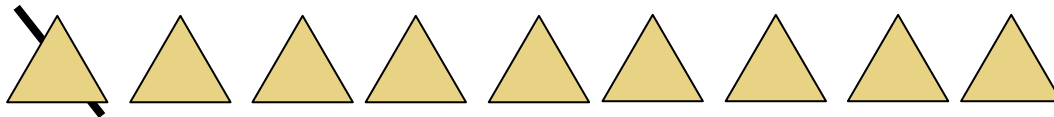
$$10 - 7 = 3$$



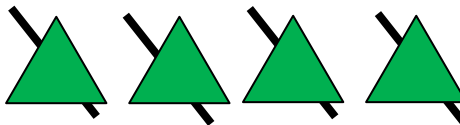
$$5 - 3 = 2$$



$$7 - 2 = 5$$



$$9 - 1 = 8$$



$$4 - 4 = 0$$