


## Making 10 with objects

---

Kindergarten addition worksheets


Draw more circles so you have 10 circles. Write the numbers.



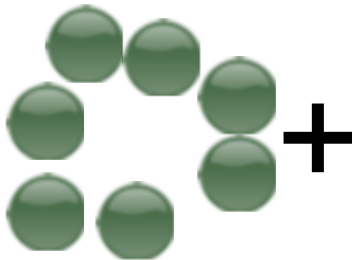
$$\underline{4} + \underline{\quad} = \underline{10}$$



$$\underline{5} + \underline{\quad} = \underline{10}$$



$$\underline{3} + \underline{\quad} = \underline{10}$$



$$\underline{7} + \underline{\quad} = \underline{10}$$





$$\underline{1} + \underline{\quad} = \underline{10}$$



## Making 10 with objects



Kindergarten addition worksheet



Draw more circles so you have 10 circles. Write the numbers.

 $+$  $=$  $\underline{4} + \underline{6} = \underline{10}$

 $+$  $=$  $\underline{5} + \underline{5} = \underline{10}$

 $+$  $=$  $\underline{3} + \underline{7} = \underline{10}$

 $+$  $=$  $\underline{7} + \underline{3} = \underline{10}$

 $+$  $=$  $\underline{1} + \underline{9} = \underline{10}$