

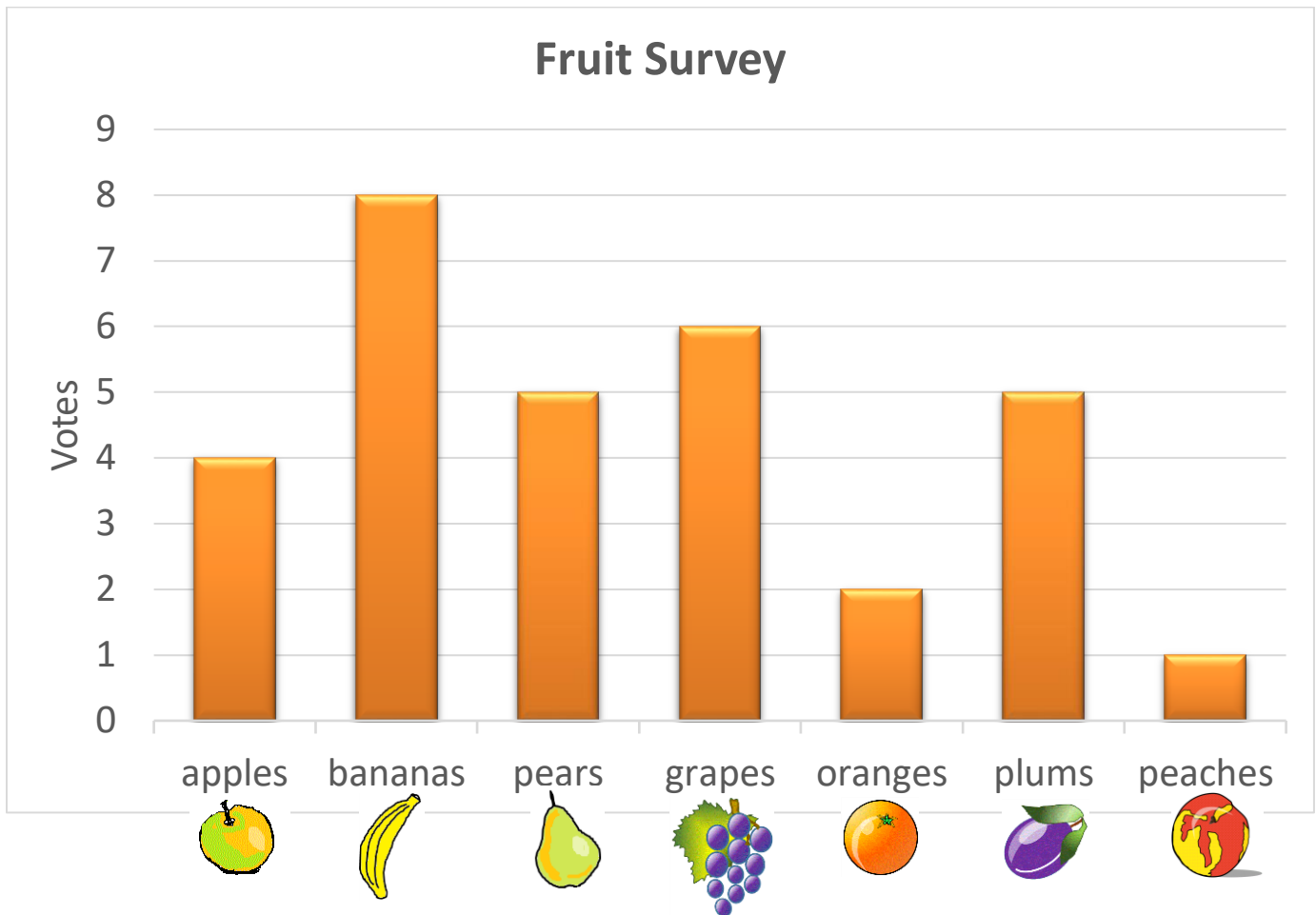
Name _____

Date _____



BAR GRAPHS SHEET 1C - FRUIT SURVEY


The children in Salamander Class had a vote on their tastiest fruit.





1) Which fruit got the most votes? _____

2) Which fruit got the least votes? _____

3) How many votes did apples get? _____ 

4) How many votes did pears get? _____ 

5) How many votes did oranges get? _____ 

6) How many votes did grapes get? _____ 

Name

Date



BAR GRAPHS SHEET 1C - FRUIT SURVEY ANSWERS

- 1) Which fruit got the most votes? bananas
- 2) Which fruit got the least votes? peaches
- 3) How many votes did apples get? 4
- 4) How many votes did pears get? 5
- 5) How many votes did oranges get? 2
- 6) How many votes did grapes get? 6