

Name _____





























Date _____








PICTURE GRAPHS 1A - SHAPE SURVEY

The children in Salamander Class had a vote on their best shape.
Each shape on the chart stands for one vote.

Favourite Shape

					
					
					
					
					
					
					
Triangle	Square	Rectangle	Pentagon	Hexagon	Octagon

- 1) Which shape got the most votes? _____
- 2) How many votes did the square get? _____ 
- 3) How many votes did the triangle get? _____ 
- 4) How many votes did the pentagon get? _____ 
- 5) How many votes did the hexagon get? _____ 
- 6) How many votes did the octagon get? _____ 
- 7) Which shape got the fewest votes? _____



PICTURE GRAPHS 1A - SHAPE SURVEY ANSWERS

1) Which shape got the most votes? octagon

2) How many votes did the square get? 4



3) How many votes did the triangle get? 6



4) How many votes did the pentagon get? 5



5) How many votes did the hexagon get? 4



6) How many votes did the octagon get? 7



7) Which shape got the fewest votes? rectangle